

NEW G.M.T. SEN. SEC. PUBLIC SCHOOL
Haibowal Kalan, Ludhiana



CLASS III

NAME _____ ROLL NO _____ SECTION _____

GENERAL INSTRUCTIONS

- ☆ "Knowledge is power". Encourage your child to cultivate the reading habits.
- ☆ Do all the work as specified by subject teachers.
- ☆ Try to do your vacation work by yourself.
- ☆ Writing should be good and neat.
- ☆ Pay special attention towards your health and caring.

TASK FOR STUDENTS



TASK FOR STUDENTS

Grow one plant. Click picture of it after two week and paste in your EVS notebook.

As you know we celebrate father's day on 19 June . Make a beautiful card for your father and surprise him with a lovely song.

Collect atleast 5 leaves from different plants and paste on A3 sheet.

Prepare lemonade on Sunday for your family and make a reel while preparing it and send it to your class incharge . Best reel will be uploaded an official channel of school.

Help your mother in her daily household chores and spend a quality time with her. Make a collage of pictures with your mother while doing the work.

Write 10 pages of English Hindi, Punjabi neat and clean in three in one notebook.

Subject	Description	To be done
English	Make a pocket dictionary of new <u>atleast</u> 50 words from your literature book with their meanings and frame one sentence from each word.	
Maths	Make a chart on A3 size sheet showing different solid shapes with their number of faces, edges and vertices	Chart
Hindi	ਪੰਜਾਬ ਤਥਾ ਤੜੀਸਾ ਕੇ ਪ੍ਰਸਿਧ ਵਯੰਜਨੌਂ ਕੇ ਚਿਤ੍ਰ ਅਪਨੀ ਸਕ੍ਰੈਪਬੁਕ ਪਰ ਚਿਪਕਾਏਂ ਤਥਾ ਤਨਕੇ ਨਾਮ ਭੀ ਲਿਖੇਂ।	Scrap Book
Punjabi	ਪੰਜਾਬ ਦੇ ਸੱਤਿਆਚਾਰ ਤੇ ਲੇਕ ਨਾਚ ਬਾਰੇ ਤਸਵੀਰਾਂ ਚਿਪਕਾਉ।	ਚਾਰਟ ਬਣਾਉ
Environmental Study	Make flow chart of your family tree on A3 sheet.	A3 sheet



ENGLISH

Rearrange Jumbled Sentences

1. is / my / name / John.

2. in / she / the / park / likes / to / walk.

3. English / I / learning / am.

4. always / late / he / is / for / class.

5. ice cream / I / love / eating.

6. the / she / morning / in / yoga / does.

7. to / want / travel / I / the / world / around.

8. happy / my / makes / music / me.

9. for / the / party / is / she / getting / ready.

10. hot / drink / I / prefer / tea.



TALK for 1 MINUTE

FOOD

1
Talk about your favorite dish and how to cook it.



2
Talk about foods you dislike the most.



3
Talk about your country's national dishes.



4
Talk about why healthy food is important.



5
Talk about your favorite café or restaurant and why you like it.



6
Talk about the most unusual food you've ever eaten.



7
Talk about what you usually eat for breakfast/lunch/dinner.



8
Talk about who are better cooks, women or men.



9
Talk about fast food.



10
Talk about table manners you know.



11
Talk about dishes you cook the best.



12
Talk about the best food for a party.



13
Talk about foods you can't live without and why.



14
Talk about GM (genetically modified) food.



15
Talk about why people become overweight.



HINDI

प्र१- संयुक्त अक्षर से बनने वाले शब्द ढूँढकर सही जगह लगाओ-

प्याज़	अच्छा	रसगुल्ला	क्या	मच्छर
लड्डू	दिल्ली	क्यारी	प्यास	हड्डी

प्य -	<input type="text"/>	<input type="text"/>
च्छ-	<input type="text"/>	<input type="text"/>
क्य-	<input type="text"/>	<input type="text"/>
ल्ल -	<input type="text"/>	<input type="text"/>
ड्ड -	<input type="text"/>	<input type="text"/>

प्र२. मिलान करो -

त् + र
ज् + ज
क् + ष
श् + र

ज
क्ष
श्र
त्र

अब बताइए कि दिये गये शब्द कौन-सी संज्ञा है?-

1. गंगा नदी

व्यक्तिवाचक संज्ञा जातिवाचक संज्ञा भाववाचक संज्ञा

2. स्कूल

व्यक्तिवाचक संज्ञा जातिवाचक संज्ञा भाववाचक संज्ञा

3. फूल

व्यक्तिवाचक संज्ञा जातिवाचक संज्ञा भाववाचक संज्ञा

4. ठंडा

व्यक्तिवाचक संज्ञा जातिवाचक संज्ञा भाववाचक संज्ञा

5. मदुरै

व्यक्तिवाचक संज्ञा जातिवाचक संज्ञा भाववाचक संज्ञा

6. शहर

व्यक्तिवाचक संज्ञा जातिवाचक संज्ञा भाववाचक संज्ञा

MATHS

ADDITION WORKSHEETS FOR GRADE 3

All these questions involve finding the missing addend for these sums. All the missing addends are a number from 1 to 9

1 $47 + \square = 51$

2 $22 + \square = 27$

3 $34 + \square = 41$

4 $54 + \square = 62$

5 $37 + \square = 40$

9 $\square + 29 = 34$


10 $\square + 44 = 48$

11 $\square + 62 = 67$

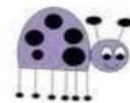
12 $\square + 17 = 22$

13 $\square + 83 = 89$

I am an odd number.
I am a multiple of 39.
I am less than 25, but
more than 11.
Who am I?



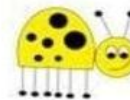
I am less than 20.
I am 2 inches more
than a foot.
Who am I?



I am a multiple of 5.
I am three times as
much as (4+1).
Who am I?



My tens digit is a one.
When 48 is divided by
3, I'm the answer.
Who am I?



1. Read the number. What is the place value of the underlined digit?

a 4821 b 3261 c 3827

d 5637 e 8409 f 2064

g 3956 h 3749 i 2690

2. Write in expanded form.

a 7824 = _____

b 3549 = _____

c 6042 = _____

d 8050 = _____

e 5097 = _____

f 4230 = _____

g 9371 = _____

PUNJABI

1. ਹੇਠਾਂ ਦਿੱਤੇ ਗੁਬਾਰਿਆਂ ਵਿੱਚ ਨਾਂਵ ਸ਼ਬਦ ਲਿਖੋ ?



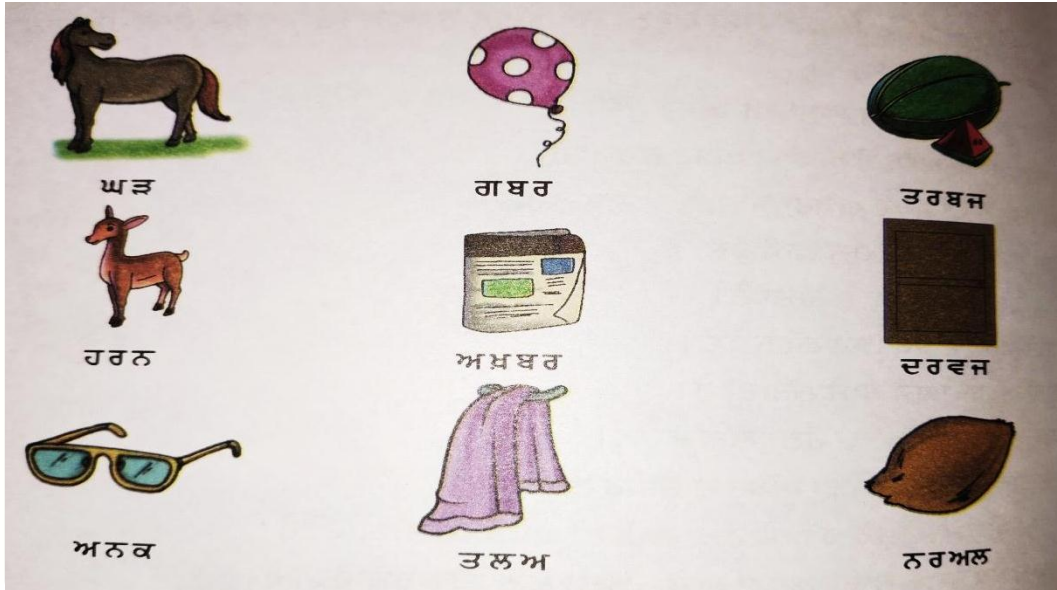
ਪ੍ਰਸ਼ਨ: 2 ਸਵਰ ਅੱਖਰ ਕਿਹੜੇ ਹੁੰਦੇ ਹਨ?

ਉੱਤਰ :- _____

ਪ੍ਰਸ਼ਨ: 3 ਬੋਲੀ ਤੋਂ ਕੀ ਭਾਵ ਹੈ?

ਉੱਤਰ: _____

1. ਚਿੱਤਰ ਵੇਖ ਕੇ ਸਹੀ ਲਗਾਂ ਦਾ ਵਰਤੋਂ ਕਰ ਕੇ ਸ਼ਬਦ ਠੀਕ ਕਰੋ :-



2. ਹੇਠ ਦਿੱਤੇ ਵਾਕਾਂ ਦੇ ਬਹੁਤੇ ਸ਼ਬਦਾਂ ਦੀ ਥਾਂ ਇੱਕ ਸ਼ਬਦ ਲਿਖੋ :-

(ੳ) ਜਿਸ ਨੂੰ ਰੱਬ ਉੱਤੇ ਵਿਸ਼ਵਾਸ ਹੋਵੇ । _____

(ਅ) ਕਹਾਣੀ ਲਿਖਣ ਵਾਲਾ । _____

(ੲ) ਨਾਟਕ ਲਿਖਣ ਵਾਲਾ । _____

(ਸ) ਲੱਕੜ ਦਾ ਕੰਮ ਕਰਨ ਵਾਲਾ । _____

3. ਗੁਰਮੁਖੀ ਵਰਣਮਾਲਾ ਦੇ ਦਿੱਤੇ ਗਏ ਵਰਗਾਂ ਦੇ ਅੱਖਰ ਲਿਖੋ:

ਮੁੱਖ ਵਰਗ _____

ਚਵਰਗ _____

ਟਵਰਗ _____

ਨਵੀਨ ਵਰਗ _____

ENVIRONMENTAL STUDY

WORKSHEET

Class: III

Level: 2

Subject: ENVIRONMENTAL STUDIES

Topic: OUR BODY PARTS

I. CHOOSE THE CORRECT OPTION: -

1. Which part of our body helps us to see things?

- A) Ears
- B) Teeth
- C) Eyes
- D) Hands

2. Which of the following part controls all the activities in our body?

- A) Eyes
- B) Ears
- C) Brain
- D) Nose

3. Which part of our body helps in breathing?

- A) Heart
- B) Brain
- C) Lungs
- D) None of these

4. Which part of our body helps us to watch television?

- A) Eye
- B) Skin
- C) Nose
- D) Both (A) and (B)

5. Select the odd one out

- A) Elbow
- B) Wrist
- C) Eye
- D) Knees

7. Which of the following organ of body is protected by skull?

- A) Stomach
- B) Lungs
- C) Brain
- D) Heart

8. Our skin gives us the sense of ____.

- a) taste
- b) touch
- c) smell
- d) movement

A) Both (a) and (b)

B) Both (c) and (d)

C) Both (b) and (c)

D) All are true

9. Match the following: -

A		B	
i	Head	1	Hand
ii	Eyes	2	Hair
iii	Ears	3	Vision
iv	Fingers	4	Hear



10. Which of the following is true about skin?

- a. Skin is the internal part of the body.
- b. It is a sense organ because it gives us the sense of taste.
- c. Skin covers the whole body.
- d. Skin can be white, black or whitish is colour.

11. Which of the following organ is present in the head part and is used to hear the music?

- A) Bones
- B) Fingers
- C) Legs
- D) Ear

12. Aradhya ran to open the door when her father rang the bell. She used her sense of ____.

- A) Hearing
- B) Seeing
- C) Touching
- D) Tasting

13. Our stomach is located:

- A) in the head
- B) in the left side of the body
- C) in the right side of the body
- D) below the abdomen

14. Which of the following is not a good habit?

- A) Washing our hands before eating food
- B) Eating regularly at the fixed time in a day
- C) Swallowing the food without chewing it
- D) Eating fresh and warm food

15. Ram loves to study till late night. There is very dim light in his room. He gets very less marks in his class tests because he is not able he read properly and he makes many spelling mistakes. His mother is worried about Ram.

As a friend what will you suggest to his mother?

- A) His eye sight is weak so she should take him to eye doctor.
- B) He should not study in dim light.
- C) He should stop studying.
- D) Both (A) and (B)



18. Label the parts of body below:-



19. Label the diagram of our hand: -

